


$1+1=$

10

$1+1=2$



$1+2=3$

123



Time

Q1. Match the following:

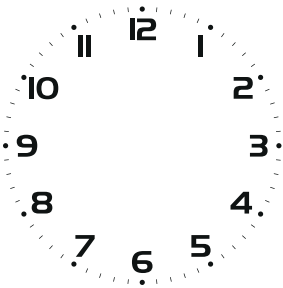
60 seconds	In a day
60 minutes	In April
7 days	In March
52 weeks	In a week
30 days	In a minute
31 days	In an year
24 hours	In an hour

Q2. What time will it be if:

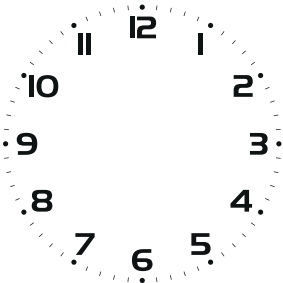
- a. The small hand is at 6 and the big hand at 12: ___ : ___
- b. The small hand between 2 and 3 and big hand at 7: ___ : ___
- c. The small hand between 11 and 12 and big hand at 9: ___ : ___

Q3. Draw hands in the clocks to show the indicated time:


- a. 20 minutes to 5



- b. 20 minutes past 11



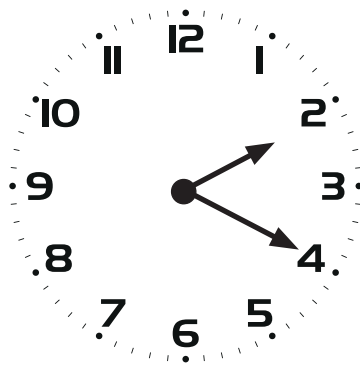
Q4. Tell the time given by the following clock in two ways:



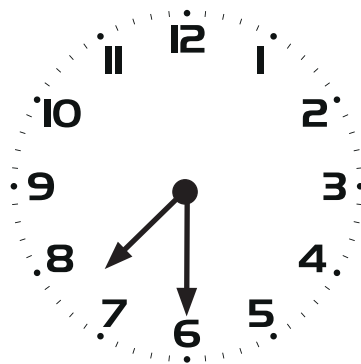
Q5. Write the correct time alongwith a.m. / p.m.:

- a. Ram came home at quarter to two in the afternoon. He came home at _____.
- b. Shilpa ate dinner at fifteen minutes past 9. She ate dinner at _____.
- c. Shreedhar goes for his football practice in the morning at five minutes to 6. He goes at _____.

Q6. Write the time in 24-hour format:



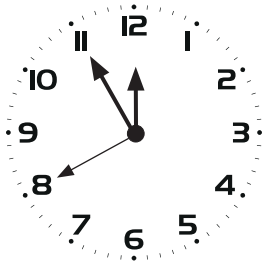
a. Surbhi came from school at _____ : _____



b. Joe goes to school at _____ : _____

Q7. As soon as the baby was born, the nurse noted the time. The clock below shows the time of birth.

Look at the clock carefully and write the time correct to seconds:



Answer: The baby was born at ___hrs. ___min. ___sec.

Q8. Match the following:

2hours 30 minutes	12 minutes
5 hours	1 hour 10 minutes
70 minutes	150 minutes
720 seconds	300 minutes

Q9. Rajesh takes 1 hr 45 min to reach the railway station and then he takes a train. The train takes 2 hr 35 min to reach his village. How much time does Ram take to reach his village from his home?

Answer: _____

Q10. Sushma has to get up atleast 3 hrs 25 min before she has to leave the house for her office. If she has to go tomorrow at 7:30, what time should she wake up?

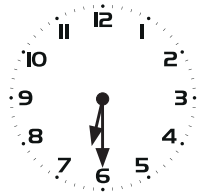
Answer: _____

Q11. At a conference the executive was handed over the timings of his flights for the next place he had to visit. Look at the cards carefully and find out the duration of the flight.

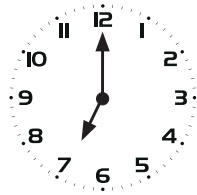


Answer: _____

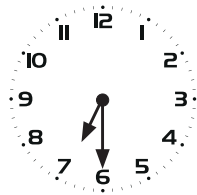
Q12. Match the clocks according to Giri's daily schedule:



Getting dressed- 7:30 a.m.



Getting up- 6:30 a.m.



Eating breakfast- 7:00 a.m.

Q13. Rajeev went to watch a play with his friends. The play started at 5:35 p.m. If the duration of the play was 2 hr 12 min what time will they come out of the theatre?

Answer: _____

Q14. If 20 minutes before, the time was:



What time will the clock show 50 minutes from now?

Answer: _____

Q15. Kamini exercises everyday for 1 hr 25 min. If she finished exercise at 7:00 a.m. today, what time did she start her exercise?

Answer: _____

ANSWERS

1.	60 seconds	In a minute
	60 minutes	In an hour
	7 days	In a week
	52 weeks	In an year
	30 days	In April
	31 days	In March
	24 hours	In a day

2. a. 6:00
b. 2:35
c. 11:45



3. a.



- b.

4. 25 minutes past 3
35 minutes to 4
5. a. 1:45 p.m.
b. 9:15 p.m.

c. 5:55 a.m.

6. a. 14:20

b. 7:30

7. 11hrs. 55min. 40 sec.

8.

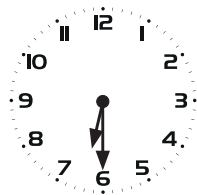
2hours 30 minutes	150 minutes
5 hours	300 minutes
70 minutes	1 hour 10 minutes
720 seconds	12 minutes

9. 4 hr 20 min

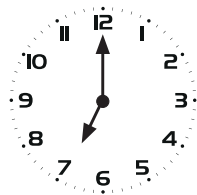
10. 4:05 a.m.

11. 2hr 18min

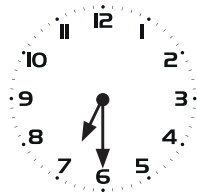
12.



Getting up- 6:30 a.m.



Eating breakfast- 7:00 a.m.



Getting dressed- 7:30 a.m.

13. 7:47 p.m.

14. 5:10

15. 5:35 a.m.